



**LESSON: REPRODUCTION IN ANIMALS**

**WORKSHEET**

**NAME:** \_\_\_\_\_ **DATE:** \_\_\_\_\_ **CLASS: IV SEC:** \_\_\_\_\_


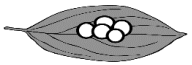

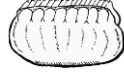




**I. Fill in the blanks with the correct answers.**

1. The cluster of eggs of a fish is called a \_\_\_\_\_.
2. The shell formed around a caterpillar is called \_\_\_\_\_.
3. A \_\_\_\_\_ hides its eggs in dark corners

**II. Define the following.**

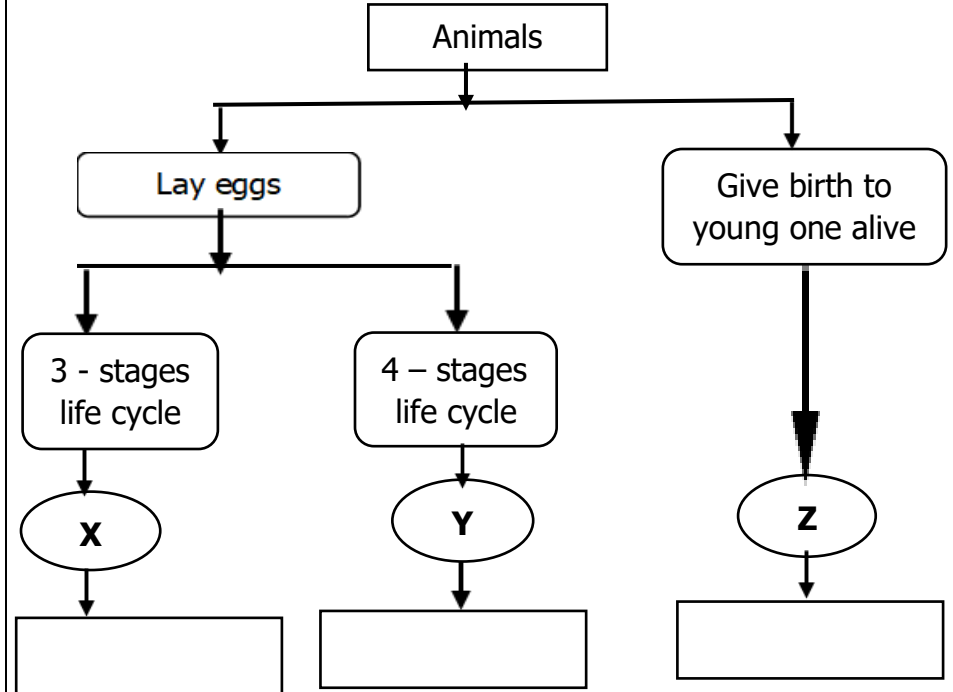
1. Reproduction - \_\_\_\_\_  
\_\_\_\_\_
2. Hatching - \_\_\_\_\_  
\_\_\_\_\_

**III. Match the following organisms in Column - I with their eggs in Column - II.**

Column-I		Column- II	
p.		i.	
q.		ii.	
r.		iii.	
s.		iv.	

**p** \_\_\_\_\_ **q** \_\_\_\_\_ **r** \_\_\_\_\_ **s** \_\_\_\_\_

**IV. Study the classification table shown below. What could X, Y, Z represent?**



**V. Give reasons for the following statements.**

1. A Crocodile digs shallow pits in sandy river banks

**Ans:** \_\_\_\_\_  
\_\_\_\_\_  
\_\_\_\_\_

2. The parent bird feeds and looks after their young ones till they are strong enough to look after themselves.

**Ans:** \_\_\_\_\_  
\_\_\_\_\_  
\_\_\_\_\_